

9	8	4
3	5	7
0	1	2

7	8	6
3	5	9
0	1	2

9	8	4
3	5	6
0	1	2


7	8	6
3	5	9
0	1	2

6	7	8
3	4	5
0	1	2


7	8	6
3	5	9
0	1	2

● Połącz linia tabliczki z tak samo ułożonymi cyframi!

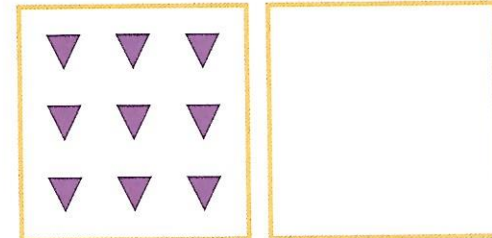
$$\square = \square + \square$$




$$\square = \square + \square$$




$$\square = \square + \square$$



$$9 = 8 + 1$$



● Policz figury każdego rodzaju. Wpisz do okienek obok figur odpowiednie liczby.



● Narysuj tyle figur, aby ich liczba odpowiadała umieszczonej cyfrze.